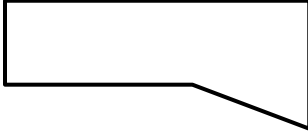




Name

Date



MENTAL MATHS SHEET 3:A10

1)	$\underline{\quad} - 6 = 7$	
2)	How many right angles? 	
3)	$5 + 3 = 2 \times \underline{\quad}$	
4)	Round 72 to the nearest 10.	
5)	Which two numbers below add up to 20? 8 15 7 14 12	
6)	What fraction is shaded? 	
7)	$500 + \underline{\quad} = 523$	
8)	What is 378 subtract 100?	
9)	I have 18 socks. How many pairs can I make? 	
10)	If I have three 20p coins, how much more to make £1?	
11)	16 people were on a bus. Half get off at the stop and two more people get on. How many are on the bus?	
12)	$5 \frac{1}{2}$ metres = $\underline{\quad}$ cm	
13)	$3 + 3 + 3 + 3 + 3 + 3 = 3 \times \underline{\quad}$	
14)	How much is four £2 coins and four 2p coins?	
15)	Which number is least? 725 752 257 275 527	
16)	Add up the even numbers between 11 and 15.	






Name

Date



MENTAL MATHS SHEET 3:A10 ANSWERS

1)	$\underline{\quad} - 6 = 7$	13
2)	How many right angles? 	3
3)	$5 + 3 = 2 \times \underline{\quad}$	4
4)	Round 72 to the nearest 10.	70
5)	Which two numbers below add up to 20? 8 15 7 14 12	8 and 12
6)	What fraction is shaded? 	5/6
7)	$500 + \underline{\quad} = 523$	23
8)	What is 378 subtract 100?	278
9)	I have 18 socks. How many pairs can I make? 	9
10)	If I have three 20p coins, how much more to make £1?	40p
11)	16 people were on a bus. Half get off at the stop and two more people get on. How many are on the bus?	10 people
12)	$5 \frac{1}{2}$ metres = $\underline{\quad}$ cm	550
13)	$3 + 3 + 3 + 3 + 3 + 3 = 3 \times \underline{\quad}$	6
14)	How much is four £2 coins and four 2p coins?	£8.08
15)	Which number is least? 725 752 257 275 527	257
16)	Add up the even numbers between 11 and 15.	12+14=26



Free Math Sheets, Math Games and Math Help

MATH-SALAMANDERS.COM