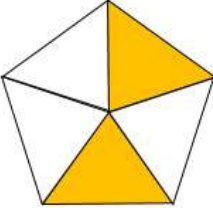



Name

Date



# MENTAL MATHS SHEET 3:A5

1)	$17 - 8$	
2)	Halve 18	
3)	What fraction is shaded? 	
4)	3 TENS = ____ FIVES	
5)	What is the name of this shape?  <b>cube cone cylinder sphere pyramid</b>	
6)	How many cm in $\frac{1}{2}$ m?	
7)	$200 + 40 + 9 =$	
8)	What is the next number? <b>30, 35, 40, 45, 50, ____</b>	
9)	$7 + 7 + 7 + 7 =$ ____ $\times 7$	
10)	What number is 10 less than 54?	
11)	3 TENS + 3 FIVES	
12)	How many sides does an octagon have?	
13)	How many more is 14 than 8?	
14)	I run 2 miles every day for a week. How far have I run?	
15)	1 yard = 3 feet. How many feet in 5 yards?	
16)	Which of these numbers is odd? <b>260 152 386 351</b>	

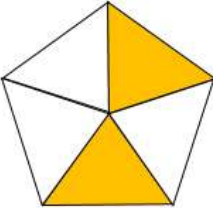



Name

Date



# MENTAL MATHS SHEET 3:A5 ANSWERS

1)	$17 - 8$	<b>9</b>
2)	Halve 18	<b>9</b>
3)	What fraction is shaded? 	<b><math>\frac{2}{5}</math></b>
4)	3 TENS = ____ FIVES	<b>6</b>
5)	What is the name of this shape?  <b>cube cone cylinder sphere pyramid</b>	<b>cylinder</b>
6)	How many cm in $\frac{1}{2}$ m?	<b>50</b>
7)	$200 + 40 + 9 =$	<b>249</b>
8)	What is the next number? <b>30, 35, 40, 45, 50, ____</b>	<b>55</b>
9)	$7 + 7 + 7 + 7 =$ ____ $\times 7$	<b>4</b>
10)	What number is 10 less than 54?	<b>44</b>
11)	3 TENS + 3 FIVES	<b>45p</b>
12)	How many sides does an octagon have?	<b>8</b>
13)	How many more is 14 than 8?	<b>6</b>
14)	I run 2 miles every day for a week. How far have I run?	<b>14 miles</b>
15)	1 yard = 3 feet. How many feet in 5 yards?	<b>15</b>
16)	Which of these numbers is odd? <b>260 152 386 351</b>	<b>351</b>



Free Math Sheets, Math Games and Math Help

[MATH-SALAMANDERS.COM](http://MATH-SALAMANDERS.COM)