
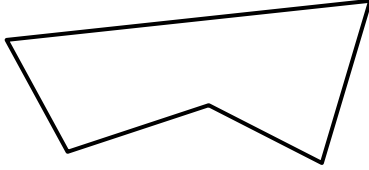



Name

Date



MENTAL MATHS QUIZ 4:10

1)	$42 \div 6$	
2)	How much more to make £2? 	
3)	$10 \times 4 = 33 + \underline{\quad}$	
4)	What is the name of this shape? 	
5)	$20 + 300 + 7 + 1000$	
6)	8×6	
7)	Round 5638 to the nearest 100.	
8)	What is $\frac{3}{7} + \frac{2}{7}$	
9)	$0.3 + \underline{\quad} = 1.2$	
10)	four thousand subtract four	
11)	Joe is 6 years older than Molly. Molly is half the age of Luke. If Luke is 26 years old, how old is Joe?	
12)	(1 gallon = 8 pints) How many pints in 5 gallons?	
13)	A banana costs 24p. How much does a bunch of 4 cost?	
14)	Measure this line in cm. 	
15)	I have £2. I spend 68p. How much do I have left?	
16)	An egg weighs about..... 7g 70g 700g 7000g?	


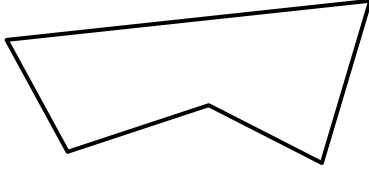



Name

Date



MENTAL MATHS QUIZ 4:10 ANSWERS

1)	$42 \div 6$	7
2)	How much more to make £2? 	74p
3)	$10 \times 4 = 33 + \underline{\quad}$	7
4)	What is the name of this shape? 	(irregular) pentagon
5)	$20 + 300 + 7 + 1000$	1327
6)	8×6	48
7)	Round 5638 to the nearest 100.	5600
8)	What is $\frac{3}{7} + \frac{2}{7}$	$\frac{5}{7}$
9)	$0.3 + \underline{\quad} = 1.2$	0.9
10)	four thousand subtract four	3996
11)	Joe is 6 years older than Molly. Molly is half the age of Luke. If Luke is 26 years old, how old is Joe?	19 years old
12)	(1 gallon = 8 pints) How many pints in 5 gallons?	40
13)	A banana costs 24p. How much does a bunch of 4 cost?	96p
14)	Measure this line in cm. 	approx. 8.7cm
15)	I have £2. I spend 68p. How much do I have left?	£1.32
16)	An egg weighs about..... 7g 70g 700g 7000g?	70g



Free Math Sheets, Math Games and Math Help

MATH-SALAMANDERS.COM