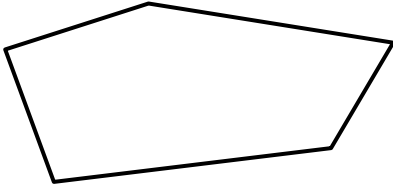



Name

Date



MENTAL MATHS QUIZ 4:4

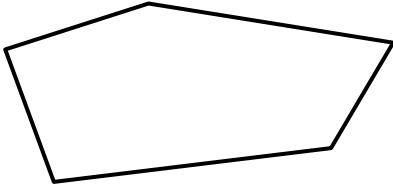

1)	$3 \times \underline{\quad} = 30$	
2)	Write down a multiple of 5 between 22 and 32	
3)	$40 \div 10$	
4)	$628 = 600 + 8 + \underline{\quad}$	
5)	Write down two thousand nine hundred and fourteen	
6)	What is the next number? 17, 21, 25, 29, 33, <u> </u>	
7)	How many vertices does this shape have? 	
8)	How many 3s make 21?	
9)	Round 165 to the nearest 10.	
10)	What fraction of the shape below is shaded? 	
11)	How much money is 1 TWENTY plus 3 TENS plus 4 FIVES?	
12)	$48 - \underline{\quad} = 42$	
13)	The time is 3:40pm. What will the time be in half an hour?	
14)	How many TENS make £1.40?	
15)	A pencil costs 31p. How much do 3 pencils cost?	
16)	One yard is 3 feet. How many feet in 7 yards?	

Name

Date



MENTAL MATHS QUIZ 4:4 ANSWERS

1)	$3 \times \underline{\quad} = 30$	10
2)	Write down a multiple of 5 between 22 and 32	25 or 30
3)	$40 \div 10$	4
4)	$628 = 600 + 8 + \underline{\quad}$	20
5)	Write down two thousand nine hundred and fourteen	2914
6)	What is the next number? 17, 21, 25, 29, 33, <u> </u>	37
7)	How many vertices does this shape have? 	5
8)	How many 3s make 21?	7
9)	Round 165 to the nearest 10.	170
10)	What fraction of the shape below is shaded? 	$\frac{5}{8}$
11)	How much money is 1 TWENTY plus 3 TENS plus 4 FIVES?	70p
12)	$48 - \underline{\quad} = 42$	6
13)	The time is 3:40pm. What will the time be in half an hour?	4:10pm
14)	How many TENS make £1.40?	14
15)	A pencil costs 31p. How much do 3 pencils cost?	93p
16)	One yard is 3 feet. How many feet in 7 yards?	21