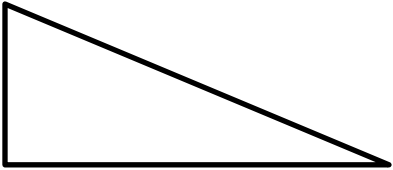
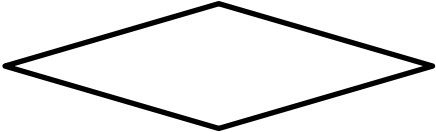


Name

Date



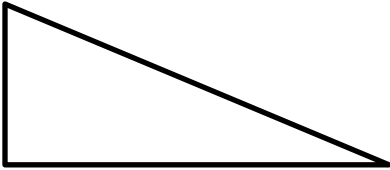
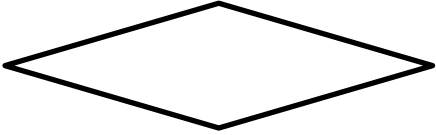
MENTAL MATHS QUIZ 5:2

1)	0.6×4	
2)	Which two of the numbers below are prime? 17 14 15 18 19 10	
3)	How many acute angles? 	
4)	What is the perimeter of a square with sides 50cm?	
5)	Which of these numbers are divisible by 5? 32 51 45 20 18	
6)	Add together $\frac{2}{10}$, $\frac{3}{10}$ and $\frac{4}{10}$	
7)	$9278 = 9008 + \underline{\hspace{2cm}}$	
8)	What is the name of this shape?  trapezium rectangle rhombus square	
9)	Round 3.48 to the nearest whole number.	
10)	A 2kg chicken takes 15 minutes plus 25 minutes per 500g to cook. How long do I need to cook it for? <u> </u> h <u> </u> min	
11)	I buy 10 raffle tickets at £1.60 per ticket. How much money have I spent?	
12)	$\frac{1}{4}$ of 32 subtract $\frac{1}{3}$ of 18	
13)	What is the value of the expression $2x + 1$ if $x = 6$?	
14)	Sally spends £4.30 on a sandwich and £2.50 on a drink. How much change from £10?	
15)	In a class, $\frac{2}{5}$ of the children are boys. What fraction are girls?	
16)	I set off at 7:40am. My journey takes 45 min. When do I arrive?	





MENTAL MATHS QUIZ 5:2 ANSWERS

1)	0.6×4	2.4
2)	Which two of the numbers below are prime? 17 14 15 18 19 10	17 and 19
3)	How many acute angles? 	2
4)	What is the perimeter of a square with sides 50cm?	200 cm or 2m
5)	Which of these numbers are divisible by 5? 32 51 45 20 18	45 and 20
6)	Add together $\frac{2}{10}$, $\frac{3}{10}$ and $\frac{4}{10}$	$\frac{9}{10}$
7)	$9278 = 9008 + \underline{\quad}$	270
8)	What is the name of this shape?  trapezium rectangle rhombus square	rhombus
9)	Round 3.48 to the nearest whole number.	3
10)	A 2kg chicken takes 15 minutes plus 25 minutes per 500g to cook. How long do I need to cook it for? <u> </u> h <u> </u> min	1 h 55 min
11)	I buy 10 raffle tickets at £1.60 per ticket. How much money have I spent?	£16
12)	$\frac{1}{4}$ of 32 subtract $\frac{1}{3}$ of 18	$8 - 6 = 2$
13)	What is the value of the expression $2x + 1$ if $x = 6$?	13
14)	Sally spends £4.30 on a sandwich and £2.50 on a drink. How much change from £10?	£3.20
15)	In a class, $\frac{2}{5}$ of the children are boys. What fraction are girls?	$\frac{3}{5}$
16)	I set off at 7:40am. My journey takes 45 min. When do I arrive?	8:25am

