



Name _____



Date _____



COUNT AND ORDER SHEET 2

Count the coins and put the values in order from smallest to biggest.



 _____ ¢	 _____ ¢
--	---

 _____ ¢	 _____ ¢
--	---

Order the sets of coins from smallest to largest

_____ ¢	_____ ¢	_____ ¢	_____ ¢
smallest			largest

Count the coins and put the values in order from smallest to biggest.

 _____ ¢	 _____ ¢
--	---

 _____ ¢	 _____ ¢
--	---

Order the sets of coins from smallest to largest

_____ ¢	_____ ¢	_____ ¢	_____ ¢
smallest			largest

Name



Date



COUNT AND ORDER SHEET 2 ANSWERS

Count the coins and put the values in order from smallest to biggest.



	<u>15¢</u>		<u>12¢</u>
---	------------	--	------------

	<u>11¢</u>		<u>7¢</u>
---	------------	--	-----------

Order the sets of coins from smallest to largest

<u>7¢</u> smallest	<u>11¢</u>	<u>12¢</u>	<u>15¢</u> largest
-----------------------	------------	------------	-----------------------

Count the coins and put the values in order from smallest to biggest.

	<u>16¢</u>		<u>11¢</u>
---	------------	--	------------

	<u>20¢</u>		<u>21¢</u>
---	------------	--	------------

Order the sets of coins from smallest to largest

<u>11¢</u> smallest	<u>16¢</u>	<u>20¢</u>	<u>21¢</u> largest
------------------------	------------	------------	-----------------------