








Name _____

Date _____



COUNTING QUARTERS SHEET 2

Count the quarters. Work out the amounts in dollars and cents.

	25 ¢ \$ 0.25 
	_____ ¢ \$ _____
	_____ ¢ \$ _____
	_____ ¢ \$ _____
	_____ ¢ \$ _____
	_____ ¢ \$ _____

Use your answers to fill in the table below







3 quarters = _____ ¢	5 quarters = \$ _____	4 quarters = \$ _____
6 quarters = \$ _____	1 quarter = _____ ¢	2 quarters = _____ ¢

Name

Date



COUNTING QUARTERS SHEET 2 ANSWERS

	25 ¢ \$ 0.25
	<u>50</u> ¢ \$ <u>0.50</u>
	<u>100</u> ¢ \$ <u>1</u>
	<u>75</u> ¢ \$ <u>0.75</u>
	<u>150</u> ¢ \$ <u>1.50</u>
	<u>125</u> ¢ \$ <u>1.25</u>

Use your answers to fill in the table below

3 quarters = <u>75</u> ¢	5 quarters = \$ <u>1.25</u>	4 quarters = \$ <u>1</u>
6 quarters = \$ <u>1.50</u>	1 quarter = <u>25</u> ¢	2 quarters = <u>50</u> ¢