








Name \_\_\_\_\_

Date \_\_\_\_\_



# COUNTING QUARTERS SHEET 3

Count the quarters. Work out the amounts in dollars and cents.

	50 ¢ \$ 0.50 
	_____ ¢ \$ _____
	_____ ¢ \$ _____
	_____ ¢ \$ _____
	_____ ¢ \$ _____
	_____ ¢ \$ _____

Use your answers to fill in the table below







2 quarters = _____ ¢	6 quarters = \$ _____	7 quarters = \$ _____
5 quarters = \$ _____	3 quarters = _____ ¢	4 quarters = \$ _____

Name

Date



# COUNTING QUARTERS SHEET 3 ANSWERS

	50 ¢ \$ 0.50
	<u>100</u> ¢ \$ <u>1</u>
	<u>75</u> ¢ \$ <u>0.75</u>
	<u>150</u> ¢ \$ <u>1.50</u>
	<u>175</u> ¢ \$ <u>1.75</u>
	<u>125</u> ¢ \$ <u>1.25</u>

Use your answers to fill in the table below

2 quarters = <u>50</u> ¢	6 quarters = \$ <u>1.50</u>	7 quarters = \$ <u>1.75</u>
5 quarters = \$ <u>1.25</u>	3 quarters = <u>75</u> ¢	4 quarters = \$ <u>1</u>