





HOW MUCH MONEY CHALLENGE 4A



Tyger has the silver coins shown above.

- He chooses 3 of the coins and hides them in his sack.
- Newton has to guess how much money he has in his sack.

Use these two picture clues below to help you answer the questions.



How much money could Tyger have in his sack?

There are 7 possibilities - see how many you can find!

	COIN 1	COIN 2	COIN 3	TOTAL
1)				
2)				
3)				
4)				
5)				
6)				
7)				





HOW MUCH MONEY CHALLENGE 4A ANSWERS



Tyger has the silver coins shown above.

- He chooses 3 of the coins and hides them in his sack.
- Newton has to guess how much money he has in his sack.

Use these two picture clues below to help you answer the questions.



How much money could Tyger have in his sack?

There are 7 possibilities - see how many you can find!

	COIN 1	COIN 2	COIN 3	TOTAL
1)	25¢	25¢	5¢	55¢
2)	25¢	25¢	1¢	51¢
3)	25¢	10¢	10¢	45¢
4)	25¢	10¢	5¢	40¢
5)	25¢	10¢	1¢	36¢
6)	25¢	5¢	5¢	35¢
7)	25¢	5¢	1¢	31¢