

Name \_\_\_\_\_

Date \_\_\_\_\_





# HOW MUCH MONEY CHALLENGE 4B



**Tyger has the coins shown above.**

- He chooses 4 of the coins and hides them in his sack.
- Newton has to guess how much money he has in his sack.

*Use these two picture clues below to help you answer the questions.*



**How much money could Tyger have in his sack?**

*There are 6 possibilities - see how many you can find!*

	COIN 1	COIN 2	COIN 3	COIN 4	TOTAL
1)					
2)					
3)					
4)					
5)					
6)					

- What is the largest amount of money he could have? \_\_\_\_\_
- What is the smallest amount of money he could have? \_\_\_\_\_





# HOW MUCH MONEY CHALLENGE 4B ANSWERS



Tyger has the coins shown above.

- He chooses 4 of the coins and hides them in his sack.
- Newton has to guess how much money he has in his sack.

Use these two picture clues below to help you answer the questions.



**How much money could Tyger have in his sack?**

*There are 6 possibilities - see how many you can find!*

	COIN 1	COIN 2	COIN 3	COIN 4	TOTAL
1)	25¢	25¢	25¢	10¢	85¢
2)	25¢	25¢	25¢	5¢	80¢
3)	25¢	25¢	25¢	1¢	76¢
4)	25¢	25¢	10¢	10¢	70¢
5)	25¢	25¢	10¢	5¢	65¢
6)	25¢	25¢	10¢	1¢	61¢

- What is the largest amount of money he could have? **85¢**
- What is the smallest amount of money he could have? **61¢**