








Name \_\_\_\_\_

Date \_\_\_\_\_



# COUNTING 2 DOLLAR COINS SHEET 1

Count the 2 dollar coins. Work out the amounts in dollars.

	= \$ _____
	= \$ _____
	= \$ _____
	= \$ _____
	= \$ _____
	= \$ _____
	= \$ _____

How many 2 dollar coins make...

2 dollars? **1 coin**

4 dollars? \_\_\_\_\_ coins

6 dollars? \_\_\_\_\_ coins

8 dollars? \_\_\_\_\_ coins

10 dollars? \_\_\_\_\_ coins

12 dollars? \_\_\_\_\_ coins










Name

Date



# COUNTING 2 DOLLAR COINS SHEET 1 ANSWERS

Count the 2 dollar coins. Work out the amounts in dollars.

	= \$ <u>2</u>
	= \$ <u>4</u>
	= \$ <u>6</u>
	= \$ <u>8</u>
	= \$ <u>10</u>
	= \$ <u>12</u>
	= \$ <u>14</u>

How many 2 dollar coins make...

2 dollars? **1 coin**

4 dollars? **2 coins**

6 dollars? **3 coins**

8 dollars? **4 coins**

10 dollars? **5 coins**

12 dollars? **6 coins**

