








Name _____

Date _____



COUNTING 2 DOLLAR COINS SHEET 2

Count the 2 dollar coins. Work out the amounts in dollars.

	= \$ _____
	= \$ _____
	= \$ _____
	= \$ _____
	= \$ _____
	= \$ _____
	= \$ _____

How many 2 dollar coins make...

4 dollars? **2 coins**

6 dollars? _____ coins

2 dollars? _____ coins

8 dollars? _____ coins

12 dollars? _____ coins

10 dollars? _____ coins










Name

Date



COUNTING 2 DOLLAR COINS SHEET 2 ANSWERS

Count the 2 dollar coins. Work out the amounts in dollars.

	= \$ <u>4</u>
	= \$ <u>6</u>
	= \$ <u>2</u>
	= \$ <u>8</u>
	= \$ <u>12</u>
	= \$ <u>10</u>
	= \$ <u>14</u>

How many 2 dollar coins make...

4 dollars? **2** coins

6 dollars? **3** coins

2 dollars? **1** coins

8 dollars? **4** coins

12 dollars? **6** coins

10 dollars? **5** coins

