








Name _____

Date _____



COUNTING 5 CENT COINS SHEET 1

Count the 5 cent coins. Work out the amounts in cents.

	= ____ c
	= ____ c
	= ____ c
	= ____ c
	= ____ c
	= ____ c
	= ____ c

How many 5 cent coins make...

5 cents? **1 coin**

10 cents? ____ coins

15 cents? ____ coins

20 cents? ____ coins

25 cents? ____ coins

30 cents? ____ coins










Name

Date



COUNTING 5 CENT COINS SHEET 1 ANSWERS

Count the 5 cent coins. Work out the amounts in cents.

	= <u>5</u> c
	= <u>10</u> c
	= <u>15</u> c
	= <u>20</u> c
	= <u>25</u> c
	= <u>30</u> c
	= <u>35</u> c

How many 5 cent coins make...

5 cents? **1 coin**

10 cents? **2** coins

15 cents? **3** coins

20 cents? **4** coins

25 cents? **5** coins

30 cents? **6** coins

