







Name \_\_\_\_\_

Date \_\_\_\_\_



# COUNTING 5 CENT COINS SHEET 2

Count the 5 cent coins. Work out the amounts in cents.

	= ____ c
	= ____ c
	= ____ c
	= ____ c
	= ____ c
	= ____ c
	= ____ c

How many 5 cent coins make...

15 cents? **3 coins**

10 cents? \_\_\_\_ coins

20 cents? \_\_\_\_ coins

5 cents? \_\_\_\_ coin

30 cents? \_\_\_\_ coins

25 cents? \_\_\_\_ coins









Name

Date



# COUNTING 5 CENT COINS SHEET 2 ANSWERS

Count the 5 cent coins. Work out the amounts in cents.

	= <u>15</u> c
	= <u>10</u> c
	= <u>20</u> c
	= <u>5</u> c
	= <u>30</u> c
	= <u>25</u> c
	= <u>35</u> c

How many 5 cent coins make...

15 cents? **3 coins**

10 cents? **2 coins**

20 cents? **4 coins**

5 cents? **1 coin**

30 cents? **6 coins**

25 cents? **5 coins**

