

Name \_\_\_\_\_







Date \_\_\_\_\_



# COUNTING MONEY RIDDLES 3A

Use the clues to find the correct set of coins from the 4 possibilities.

CHALLENGE 1	CHALLENGE 2
<ul style="list-style-type: none"><li>• I am more than 100 cents.</li></ul>	<ul style="list-style-type: none"><li>• I am less than 250 cents.</li></ul>
<ul style="list-style-type: none"><li>• I am less than 220 cents.</li></ul>	<ul style="list-style-type: none"><li>• I do not have two coins.</li></ul>
<ul style="list-style-type: none"><li>• My highest value coin is not \$2.</li></ul>	<ul style="list-style-type: none"><li>• My lowest value coin is not 10c.</li></ul>
<ul style="list-style-type: none"><li>• All of my coins have different values.</li></ul>	<ul style="list-style-type: none"><li>• You can make my value using just 10c coins.</li></ul>
Who am I? _____	Who am I? _____

<p>A</p> 	<p>B</p> 
<p>C</p> 	<p>D</p> 
<p>E</p> 	<p>F</p> 



Name

Date



# COUNTING MONEY RIDDLES 3A ANSWERS

Use the clues to find the correct set of coins from the 4 possibilities.

CHALLENGE 1	CHALLENGE 2
<ul style="list-style-type: none"> <li>I am more than 100 cents.</li> </ul>	<ul style="list-style-type: none"> <li>I am less than 250 cents.</li> </ul>
<ul style="list-style-type: none"> <li>I am less than 220 cents.</li> </ul>	<ul style="list-style-type: none"> <li>I do not have two coins.</li> </ul>
<ul style="list-style-type: none"> <li>My highest value coin is not \$2.</li> </ul>	<ul style="list-style-type: none"> <li>My lowest value coin is not 10c.</li> </ul>
<ul style="list-style-type: none"> <li>All of my coins have different values.</li> </ul>	<ul style="list-style-type: none"> <li>You can make my value using just 10c coins.</li> </ul>
Who am I? <b><u>E) \$1.15</u></b>	Who am I? <b><u>B) \$1.10</u></b>

<p>A</p>	<p>B</p>
<p>C</p>	<p>D</p>
<p>E</p>	<p>F</p>



Free Math Sheets, Math Games and Math Help

MATH-SALAMANDERS.COM