




Name _____

Date _____



COUNTING 20 CENT COINS SHEET 1

Count the 20 cent coins. Work out the amounts in dollars and cents.

	= _____ c
	= _____ c
	= _____ c
	= _____ c
	= _____ c or \$ _____

How many 20 cent coins make...

20 cents? **1 coin**

40 cents? _____ coins

60 cents? _____ coins

80 cents? _____ coins

\$1 (or 100 cents)? _____ coins

\$1.20 (120c)? _____ coins








Name

Date



COUNTING 20 CENT COINS SHEET 1 ANSWERS

Count the 20 cent coins. Work out the amounts in dollars and cents.

	= <u>20</u> c
	= <u>40</u> c
	= <u>60</u> c
	= <u>80</u> c
	= <u>100</u> c or \$ <u>1</u>

How many 20 cent coins make...

20 cents? **1 coin**

40 cents? 2 coins

60 cents? 3 coins

80 cents? 4 coins

\$1 (or 100 cents)? 5 coins

\$1.20 (120c)? 6 coins

