






Name _____

Date _____



COUNTING 20 CENT COINS SHEET 2

Count the 20 cent coins. Work out the amounts in dollars and cents.

	= _____ c
	= _____ c
	= _____ c
	= _____ c or \$ _____
	= _____ c

How many 20 cent coins make...

60 cents? **3 coins**

20 cents? _____ coins

40 cents? _____ coins

\$1 (100 cents)? _____ coins

80 cents? _____ coins

\$1.20 (120 cents)? _____ coins








Name

Date



COUNTING 20 CENT COINS SHEET 2 ANSWERS

Count the 20 cent coins. Work out the amounts in dollars and cents.

	= <u>60</u> c
	= <u>20</u> c
	= <u>40</u> c
	= <u>100</u> c or \$ <u>1</u>
	= <u>80</u> c

How many 20 cent coins make...

60 cents? **3 coins**

20 cents? 1 coins

40 cents? 2 coins

\$1 (100 cents)? 5 coins

80 cents? 4 coins

\$1.20 (120 cents)? 6 coins

