

Name _____

Date _____



COUNTING 5, 10 AND 20 CENT COINS SHEET 1

Count the 5, 10 and 20 cent coins. Work out the amounts in cents.























Name

Date



COUNTING 5, 10 AND 20 CENT COINS SHEET 1 ANSWERS

Count the 5, 10 and 20 cent coins. Work out the amounts in cents.

 	= <u>15</u> c
 	= <u>25</u> c
 	= <u>30</u> c
  	= <u>35</u> c
  	= <u>30</u> c
   	= <u>45</u> c
   	= <u>30</u> c