




























Name \_\_\_\_\_

Date \_\_\_\_\_



# COUNTING 5, 10 AND 20 CENT COINS SHEET 2

Count the 5, 10 and 20 cent coins. Work out the amounts in cents.

  	= _____ c
  	= _____ c
   	= _____ c
   	= _____ c
    	= _____ c
    	= _____ c
  	= _____ c



Name

Date



# COUNTING 5, 10 AND 20 CENT COINS SHEET 2 ANSWERS

Count the 5, 10 and 20 cent coins. Work out the amounts in cents.

