






Name _____

Date _____



COUNTING 50 CENT COINS SHEET 1

Count the 50 cent coins. Work out the amounts in dollars and cents.

| | |
|--|------------|
|  | = _____ c |
|  | = \$ _____ |
|  | = \$ _____ |
|  | = \$ _____ |
|  | = \$ _____ |

How many 50 cent coins make...

50 cents **1 coin**

\$1 (100 cents) _____ coins

\$1.50 (150 cents) _____ coins

\$2 (200 cents) _____ coins

\$2.50 (250 cents) _____ coins

\$3 (300 cents) _____ coins








Name

Date



COUNTING 50 CENT COINS SHEET 1 ANSWERS

Count the 50 cent coins. Work out the amounts in dollars and cents.

| | |
|--|------------------|
|  | = <u>50</u> c |
|  | = \$ <u>1</u> |
|  | = \$ <u>1.50</u> |
|  | = \$ <u>2</u> |
|  | = \$ <u>2.50</u> |

How many 50 cent coins make...

50 cents **1 coin**

\$1 (100 cents) 2 coins

\$1.50 (150 cents) 3 coins

\$2 (200 cents) 4 coins

\$2.50 (250 cents) 5 coins

\$3 (300 cents) 6 coins

