






Name _____

Date _____



COUNTING 50 CENT COINS SHEET 2

Count the 50 cent coins. Work out the amounts in dollars and cents.

	= \$ _____
	= \$ _____
	= _____ c
	= \$ _____
	= \$ _____

How many 50 cent coins make...

\$1 = **2 coins**

\$1.50 (150 cents) = _____ coins

50 cents = _____ coin

\$2.50 (250 cents) = _____ coins

\$2 (200 cents) = _____ coins

\$3 (300 cents) = _____ coins








Name

Date



COUNTING 50 CENT COINS SHEET 2 ANSWERS

Count the 50 cent coins. Work out the amounts in dollars and cents.

	= \$ <u>1</u>
	= \$ <u>1.50</u>
	= <u>50</u> c
	= \$ <u>2.50</u>
	= \$ <u>2</u>

How many 50 cent coins make...

\$1 = **2** coins

\$1.50 (150 cents) = **3** coins

50 cents = **1** coin

\$2.50 (250 cents) = **5** coins

\$2 (200 cents) = **4** coins

\$3 (300 cents) = **6** coins

