









Name _____

Date _____



COUNTING DIMES SHEET 2

Count the dimes. Work out the amounts in cents.

	= _____ ¢
	= _____ ¢
	= _____ ¢
	= _____ ¢
	= _____ ¢
	= _____ ¢
	= _____ ¢
	= _____ ¢

Fill in the correct amounts

_____ dimes makes 40¢

_____ dimes makes 20¢

_____ dimes makes 60¢

_____ dimes makes 50¢

_____ dimes makes 30¢

_____ dimes makes 80¢



Free Math Sheets, Math Games and Math Help

MATH-SALAMANDERS.COM











Name

Date



COUNTING DIMES SHEET 2 ANSWERS

Count the dimes. Work out the amounts in cents.

	= <u>50</u> ¢
	= <u>30</u> ¢
	= <u>40</u> ¢
	= <u>60</u> ¢
	= <u>20</u> ¢
	= <u>10</u> ¢
	= <u>80</u> ¢
	= <u>70</u> ¢

Fill in the correct amounts

4 dimes makes 40¢

2 dimes makes 20¢

6 dimes makes 60¢

5 dimes makes 50¢

3 dimes makes 30¢

8 dimes makes 80¢



Free Math Sheets, Math Games and Math Help

MATH-SALAMANDERS.COM