







Name _____

Date _____



COUNTING LOONIES SHEET 1

Count the loonies. Work out the amounts in dollars.

	= \$ _____
	= \$ _____
	= \$ _____
	= \$ _____
	= \$ _____
	= \$ _____

Fill in the correct amounts

_____ loonies makes \$5

_____ loonies makes \$2

_____ loonies makes \$4

_____ loonies makes \$6

_____ loonies makes \$3

_____ loonies makes \$8









Name

Date



COUNTING LOONIES SHEET 1 ANSWERS

	= \$ <u>1</u>
	= \$ <u>2</u>
	= \$ <u>3</u>
	= \$ <u>4</u>
	= \$ <u>5</u>
	= \$ <u>6</u>

Fill in the correct amounts

5 loonies makes \$5

2 loonies makes \$2

4 loonies makes \$4

6 loonies makes \$6

3 loonies makes \$3

8 loonies makes \$8



Free Math Sheets, Math Games and Math Help

MATH-SALAMANDERS.COM

