

Name \_\_\_\_\_

Date \_\_\_\_\_



# COUNTING LOONIES SHEET 2

Count the loonies. Work out the amounts in dollars.

	= \$ _____
	= \$ _____
	= \$ _____
	= \$ _____
	= \$ _____
	= \$ _____

Fill in the correct amounts

\_\_\_\_\_ loonies makes \$4

\_\_\_\_\_ loonies makes \$5

\_\_\_\_\_ loonies makes \$8

\_\_\_\_\_ loonies makes \$7

\_\_\_\_\_ loonies makes \$2

\_\_\_\_\_ loonies makes \$6



Free Math Sheets, Math Games and Math Help

[MATH-SALAMANDERS.COM](http://MATH-SALAMANDERS.COM)








Name

Date



# COUNTING LOONIES SHEET 2 ANSWERS

	= \$ <u>3</u>
	= \$ <u>2</u>
	= \$ <u>4</u>
	= \$ <u>1</u>
	= \$ <u>6</u>
	= \$ <u>5</u>

Fill in the correct amounts

4 loonies makes \$4

5 loonies makes \$5

8 loonies makes \$8

7 loonies makes \$7

2 loonies makes \$2

6 loonies makes \$6



Free Math Sheets, Math Games and Math Help

[MATH-SALAMANDERS.COM](http://MATH-SALAMANDERS.COM)