








Name \_\_\_\_\_

Date \_\_\_\_\_



# COUNTING LOONIES AND TOONIES SHEET 1

Count the loonies and toonies. Work out the amounts in dollars.

|  |           |
|--|-----------|
|    | = \$ ____ |
|    | = \$ ____ |
|    | = \$ ____ |
|   | = \$ ____ |
|  | = \$ ____ |
|  | = \$ ____ |
|  | = \$ ____ |



Name

Date



# COUNTING LOONIES AND TOONIES

## SHEET 1 ANSWERS

|  |               |
|--|---------------|
|    | = \$ <u>3</u> |
|    | = \$ <u>4</u> |
|    | = \$ <u>5</u> |
|   | = \$ <u>5</u> |
|  | = \$ <u>6</u> |
|  | = \$ <u>7</u> |
|  | = \$ <u>6</u> |

