








Name _____

Date _____



COUNTING LOONIES AND TOONIES SHEET 2

Count the loonies and toonies. Work out the amounts in dollars.

	= \$ ____
	= \$ ____
	= \$ ____
	= \$ ____
	= \$ ____
	= \$ ____
	= \$ ____



Name _____

Date _____



COUNTING LOONIES AND TOONIES

SHEET 2 ANSWERS

	= \$ <u>5</u>
	= \$ <u>6</u>
	= \$ <u>7</u>
	= \$ <u>7</u>
	= \$ <u>9</u>
	= \$ <u>8</u>
	= \$ <u>7</u>