








Name \_\_\_\_\_

Date \_\_\_\_\_



# COUNTING NICKELS SHEET 1

Count the nickels. Work out the amounts in cents.

	= _____ ¢
	= _____ ¢
	= _____ ¢
	= _____ ¢
	= _____ ¢
	= _____ ¢
	= _____ ¢

Fill in the correct amounts

\_\_\_\_\_ nickels makes 15¢

\_\_\_\_\_ nickels makes 10¢

\_\_\_\_\_ nickels makes 30¢

\_\_\_\_\_ nickels makes 20¢

\_\_\_\_\_ nickels makes 25¢

\_\_\_\_\_ nickels makes 40¢



Free Math Sheets, Math Games and Math Help

**MATH-SALAMANDERS.COM**










Name

Date



# COUNTING NICKELS SHEET 1 ANSWERS

Count the nickels. Work out the amounts in cents.

	= <u>5</u> ¢
	= <u>10</u> ¢
	= <u>15</u> ¢
	= <u>20</u> ¢
	= <u>25</u> ¢
	= <u>30</u> ¢
	= <u>35</u> ¢

Fill in the correct amounts

3 nickels makes 15¢

2 nickels makes 10¢

6 nickels makes 30¢

4 nickels makes 20¢

5 nickels makes 25¢

8 nickels makes 40¢



Free Math Sheets, Math Games and Math Help

MATH-SALAMANDERS.COM