








Name _____

Date _____



COUNTING NICKELS SHEET 2

Count the nickels. Work out the amounts in cents.

	= ____ ¢
	= ____ ¢
	= ____ ¢
	= ____ ¢
	= ____ ¢
	= ____ ¢
	= ____ ¢

Fill in the correct amounts

____ nickels makes 20¢

____ nickels makes 15¢

____ nickels makes 10¢

____ nickels makes 30¢

____ nickels makes 35¢

____ nickels makes 25¢










Name

Date



COUNTING NICKELS SHEET 2 ANSWERS

Count the nickels. Work out the amounts in cents.

	= <u>15</u> ¢
	= <u>20</u> ¢
	= <u>10</u> ¢
	= <u>30</u> ¢
	= <u>5</u> ¢
	= <u>25</u> ¢
	= <u>35</u> ¢

Fill in the correct amounts

4 nickels makes 20¢

3 nickels makes 15¢

2 nickels makes 10¢

6 nickels makes 30¢

7 nickels makes 35¢

5 nickels makes 25¢



Free Math Sheets, Math Games and Math Help

MATH-SALAMANDERS.COM