







Name \_\_\_\_\_

Date \_\_\_\_\_



# COUNTING TOONIES SHEET 1

Count the toonies. Work out the amounts in dollars.

	= \$ ____
	= \$ ____
	= \$ ____
	= \$ ____
	= \$ ____
	= \$ ____

Fill in the correct amounts

\_\_\_\_\_ toonies makes \$4

\_\_\_\_\_ toonies makes \$6

\_\_\_\_\_ toonies makes \$8

\_\_\_\_\_ toonies makes \$10



Free Math Sheets, Math Games and Math Help

**MATH-SALAMANDERS.COM**









Name

Date



# COUNTING TOONIES SHEET 1 ANSWERS

	= <u>\$2</u>
	= <u>\$4</u>
	= <u>\$6</u>
	= <u>\$8</u>
	= <u>\$10</u>
	= <u>\$12</u>

Fill in the correct amounts

2 toonies makes \$4

3 toonies makes \$6

4 toonies makes \$8

5 toonies makes \$10



Free Math Sheets, Math Games and Math Help

[MATH-SALAMANDERS.COM](http://MATH-SALAMANDERS.COM)