










Name _____

Date _____



COUNTING COINS TO \$1 SHEET 2

Count the coins. Work out the amounts in cents.

	_____ ¢
	_____ ¢
	_____ ¢
	_____ ¢
	_____ ¢
	_____ ¢
	_____ ¢
	_____ ¢
	_____ ¢



Name

Date



COUNTING COINS TO \$1 SHEET 2 ANSWERS

	<u>45</u> ¢
	<u>50</u> ¢
	<u>60</u> ¢
	<u>50</u> ¢
	<u>55</u> ¢
	<u>55</u> ¢
	<u>45</u> ¢
	<u>75</u> ¢
	<u>50</u> ¢



Free Math Sheets, Math Games and Math Help

MATH-SALAMANDERS.COM