

Name \_\_\_\_\_

Date \_\_\_\_\_



# COUNTING COINS TO \$1 SHEET 4

Count the coins. Work out the amounts in cents.

	_____ ¢
	_____ ¢
	_____ ¢
	_____ ¢
	_____ ¢
	_____ ¢
	_____ ¢











Name

Date



# COUNTING COINS TO \$1 SHEET 4 ANSWERS

	<u>45</u> ¢
	<u>50</u> ¢
	<u>75</u> ¢
	<u>65</u> ¢
	<u>75</u> ¢
	<u>95</u> ¢
	<u>95</u> ¢
	<u>85</u> ¢