











































Name _____

Date _____



COUNTING COINS TO \$2 SHEET 3

Count the coins. Work out the amounts in dollars.

| | | | | | | | |
|-------------------------------------------------------------------------------------|-------------------------------------------------------------------------------------|-------------------------------------------------------------------------------------|--------------------------------------------------------------------------------------|---------------------------------------------------------------------------------------|---------------------------------------------------------------------------------------|---------------------------------------------------------------------------------------|----------|
|  |  |  |  | \$ _____ | | | |
|  |  |  |  | \$ _____ | | | |
|  |  |  |  | \$ _____ | | | |
|  |  |  |  |  | \$ _____ | | |
|  |  |  |  |  |  |  | \$ _____ |
|  |  |  |  |  | \$ _____ | | |
|  |  |  |  |  |  | \$ _____ | |
|  |  |  |  |  |  |  | \$ _____ |



Name

Date



COUNTING COINS TO \$2 SHEET 3 ANSWERS



\$ 1.40



\$ 1.45



\$ 1.20



\$ 1.65



\$ 1.05



\$ 1.85



\$ 1.70



\$ 1.65



Free Math Sheets, Math Games and Math Help

MATH-SALAMANDERS.COM