








Name _____

Date _____



COUNTING QUARTERS SHEET 2

Count the quarters. Work out the amounts in dollars and cents.

	= ____ ¢
	= ____ ¢
	= \$ ____
	= ____ ¢
	= \$ ____
	= \$ ____
	= \$ ____

Fill in the correct amounts

_____ quarters makes \$1

_____ quarters makes 75¢

_____ quarters makes \$1.50

_____ quarters makes \$1.25



Free Math Sheets, Math Games and Math Help

MATH-SALAMANDERS.COM










Name

Date



COUNTING QUARTERS SHEET 2 ANSWERS

		= <u>75¢</u>
		= <u>50¢</u>
		= <u>\$1.25</u>
		= <u>25¢</u>
		= <u>\$1</u>
		= <u>\$1.75</u>
		= <u>\$1.50</u>

Fill in the correct amounts

4 quarters makes \$1

3 quarters makes 75¢

6 quarters makes \$1.50

5 quarters makes \$1.25



Free Math Sheets, Math Games and Math Help

MATH-SALAMANDERS.COM