







KNOW YOUR COINS

Draw lines to match the pictures of the coins to their correct names and values.

<u>COIN</u>	<u>NAME</u>	<u>VALUE</u>
	penny	1 cent = 1¢
	nickel	5 cents = 5¢
	dime	10 cents = 10¢
	quarter	25 cents = 25¢

Coin				
Name	penny	nickel	dime	quarter
Value	1 cent = 1¢	5 cents = 5¢	10 cents = 10¢	25 cents = 25¢

