







Name _____

Date _____



COUNTING MONEY: 10p AND 1p COINS SHEET 1

Count the 10p and 1p coins and write down the totals.

	_____ p
	_____ p
	_____ p
	_____ p
	_____ p
	_____ p

Fill in the correct amounts

$10p + 1p + 1p = \underline{\quad} p$

$10p + 10p + 1p = \underline{\quad} p$

$10p + 10p + 1p + 1p + 1p = \underline{\quad} p$

$10p + 10p + 10p + 1p = \underline{\quad} p$









Name

Date



COUNTING MONEY: 10p AND 1p COINS

SHEET 1 ANSWERS

	<u>11</u> p
	<u>13</u> p
	<u>22</u> p
	<u>31</u> p
	<u>24</u> p
	<u>33</u> p

Fill in the correct amounts

$$10p + 1p + 1p = \underline{12} p$$

$$10p + 10p + 1p = \underline{21} p$$

$$10p + 10p + 1p + 1p + 1p = \underline{23} p$$

$$10p + 10p + 10p + 1p = \underline{31} p$$

