

Name _____
























Date _____



COUNTING MONEY: 10p AND 1p COINS SHEET 2

Count the 10p and 1p coins and write down the totals.



					_____ p	
					_____ p	
					_____ p	
					_____ p	
						_____ p

Fill in the correct amounts, remember to count the 10p coins first.

1p + 10p + 1p + 1p = _____ p

10p + 1p + 10p + 1p = _____ p

10p + 1p + 10p + 10p = _____ p

10p + 1p + 10p + 10p + 1p = _____ p

10p + 10p + 10p + 10p = _____ p

1p + 1p + 10p + 1p + 1p = _____ p

10p + 10p + 10p + 10p + 10p + 10p + 10p + 1p + 1p + 1p + 1p = _____ p




Name

Date



COUNTING MONEY: 10p AND 1p COINS

SHEET 2 ANSWERS

	<u>13</u> p
	<u>23</u> p
	<u>22</u> p
	<u>32</u> p
	<u>24</u> p

Fill in the correct amounts, remember to count the 10p coins first.

$$1\text{p} + 10\text{p} + 1\text{p} + 1\text{p} = \underline{13} \text{ p}$$

$$10\text{p} + 1\text{p} + 10\text{p} + 1\text{p} = \underline{22} \text{ p}$$

$$10\text{p} + 1\text{p} + 10\text{p} + 10\text{p} = \underline{31} \text{ p}$$

$$10\text{p} + 1\text{p} + 10\text{p} + 10\text{p} + 1\text{p} = \underline{32} \text{ p}$$

$$10\text{p} + 10\text{p} + 10\text{p} + 10\text{p} = \underline{40} \text{ p}$$

$$1\text{p} + 1\text{p} + 10\text{p} + 1\text{p} + 1\text{p} = \underline{14} \text{ p}$$

$$10\text{p} + 10\text{p} + 10\text{p} + 10\text{p} + 10\text{p} + 10\text{p} + 10\text{p} + 1\text{p} + 1\text{p} + 1\text{p} + 1\text{p} = \underline{74} \text{ p}$$

