









Name _____

Date _____



COUNTING MONEY: 5p COINS SHEET 2

Count the 5p coins and write down the correct amounts.

	_____ p
	_____ p
	_____ p
	_____ p
	_____ p
	_____ p
	_____ p
	_____ p

Fill in the correct amounts

_____ 5p coins makes 15p

_____ 5p coins makes 10p

_____ 5p coins makes 30p

_____ 5p coins makes 20p

_____ 5p coins makes 25p

_____ 5p coins makes 40p



Free Math Sheets, Math Games and Math Help

MATH-SALAMANDERS.COM



Name

Date



COUNTING MONEY: 5p COINS SHEET 2 ANSWERS

5 p
10 p
25 p
20 p
15 p
30 p
40 p
35 p

Fill in the correct amounts

3 5p coins makes 15p

2 5p coins makes 10p

6 5p coins makes 30p

4 5p coins makes 20p

5 5p coins makes 25p

8 5p coins makes 40p

