





















Name _____

Date _____



COUNTING MONEY TO 50p SHEET 2

Count the money, and work out the total of all the coins!

					_____ p	
						_____ p
						_____ p
				_____ p		
						_____ p
						_____ p

Work out the total of the coins below:

$10p + 10p + 10p + 1p = \underline{\quad} p$

$20p + 10p + 5p + 5p + 2p = \underline{\quad} p$

$20p + 10p + 5p + 5p + 1p = \underline{\quad} p$

$20p + 5p + 5p + 5p + 2p = \underline{\quad} p$



Name

Date



COUNTING MONEY TO 50p SHEET 2 ANSWERS



27p



37p



44p



42p



38p



44p

Work out the total of the coins below:

$$10p + 10p + 10p + 1p = 31p$$

$$20p + 10p + 5p + 5p + 2p = 42p$$

$$20p + 10p + 5p + 5p + 1p = 41p$$

$$20p + 5p + 5p + 5p + 2p = 37p$$



Free Math Sheets, Math Games and Math Help

MATH-SALAMANDERS.COM