

Name _____

Date _____



COUNT THE MONEY TO £5 SHEET 2

Write the total amount of money at the end of each row.






	_____
	_____
	_____
	_____
	_____
	_____
	_____

Name

Date



COUNT THE MONEY TO £5 SHEET 2 ANSWERS

	<u>£3.10</u>
	<u>£2.05</u>
	<u>£4.50</u>
	<u>£2.70</u>
	<u>£1.40</u>
	<u>£2.06</u>
	<u>£3.72</u>