













Name

Date



WHO HAS MOST? TO £5 SHEET 2

Work out how much money is in each box, then use the correct symbol: $>$, $<$ or $=$ to show whether Newton or Quadra has the most money.













<p>Newton </p>	<p>Symbol</p>	<p>Quadra </p>
		
		
		
		
		

Name

Date



WHO HAS MOST? TO £5 SHEET 2 ANSWERS

Newton 	Symbol	Quadra 
 <p style="text-align: center;"><u>£2.05</u></p>	<	 <p style="text-align: center;"><u>£2.10</u></p>
 <p style="text-align: center;"><u>£1.55</u></p>	>	 <p style="text-align: center;"><u>£1.20</u></p>
 <p style="text-align: center;"><u>£2.10</u></p>	=	 <p style="text-align: center;"><u>£2.10</u></p>
 <p style="text-align: center;"><u>£4.10</u></p>	>	 <p style="text-align: center;"><u>£2.55</u></p>
 <p style="text-align: center;"><u>£2.15</u></p>	<	 <p style="text-align: center;"><u>£2.20</u></p>