



HOW MUCH MONEY CHALLENGE 1

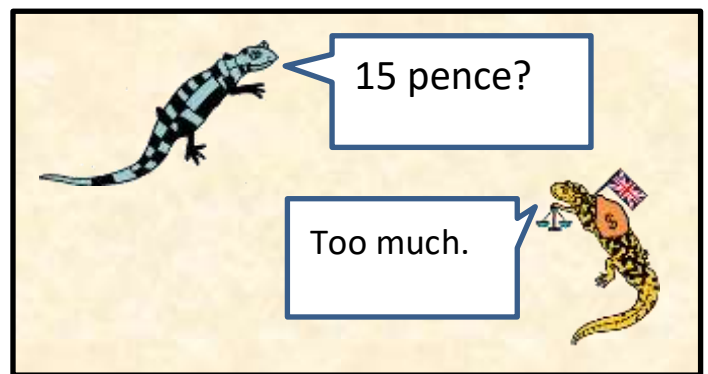
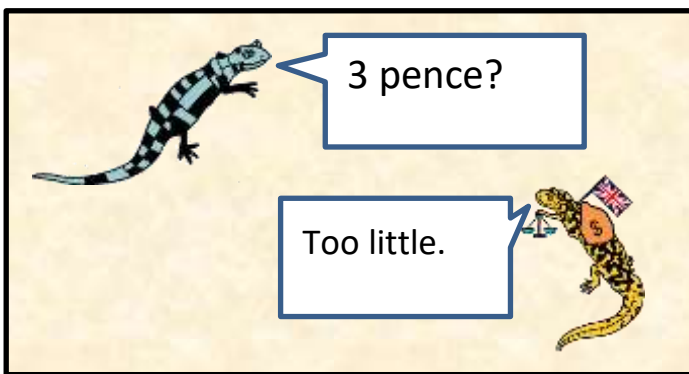


Tyger has some 10p coins, 5p coins, 2p coins and 1p coins.

He chooses two coins and hides them in his sack.

Newton has to guess how much money he has in his sack.

Use these two picture clues below to help you answer the questions.















- How much money could Tyger have in his sack?
- What is the largest amount of money he could have?
- What is the smallest amount of money he could have?

There are 6 possibilities - see how many you can find!



HOW MUCH MONEY CHALLENGES 1 ANSWERS

- The largest amount of money is 12 pence.
- The smallest amount of money is 4 pence.
- The 6 possibilities are:

Coins		Totals
		12p
		11p
		10p
		7p
		6p
		4p