

Name



Date



# TYGER'S MONEY SQUARE CHALLENGE 3

To complete this challenge, you need to use 2 ten pence coins, 2 five pence coins and 3 pennies.



16p

12p

20p

20p

16p

12p

In each square you need to place a coin so that the total at the end of each row or column is correct.












Name

Date



# TYGER'S MONEY SQUARE CHALLENGE 3 ANSWERS

16p

12p

20p

20p

16p

12p

