

Name

Date





HOW MUCH MONEY CHALLENGE 4:2



Tyger has the coins shown above.

- He chooses 3 of the coins and hides them in his sack.
- Newton has to guess how much money he has in his sack.

Use these two picture clues below to help you answer the questions.



How much money could Tyger have in his sack?

There are 6 possibilities - see how many you can find!

	COIN 1	COIN 2	COIN 3	TOTAL
1)				
2)				
3)				
4)				
5)				
6)				

- What is the largest amount of money he could have? _____
- What is the smallest amount of money he could have? _____





HOW MUCH MONEY CHALLENGE 4:2 ANSWERS



Tyger has the coins shown above.

- He chooses 3 of the coins and hides them in his sack.
- Newton has to guess how much money he has in his sack.

Use these two picture clues below to help you answer the questions.



How much money could Tyger have in his sack?

There are 6 possibilities - see how many you can find!

	COIN 1	COIN 2	COIN 3	TOTAL
1)	£1	50p	5p	£1.55
2)	£1	20p	20p	£1.40
3)	£1	20p	5p	£1.25
4)	£1	5p	5p	£1.10
5)	50p	50p	20p	£1.20
6)	50p	50p	5p	£1.05

- What is the largest amount of money he could have? **£1.55**
- What is the smallest amount of money he could have? **£1.05**