

Name

Date



# TYGER'S MONEY SQUARE CHALLENGE 4:3

To complete this challenge, you need to use the following coins:

Coin				
Number	4	4	4	4




£1.90

£1.70

£1.30

£2.30

£1.90   £1.80   £2.60   90p

In each square you need to place a coin so that the total at the end of each row or column is correct.

















Name

Date



# TYGER'S MONEY SQUARE CHALLENGE 4:3 ANSWERS



				£1.90
				£1.70
				£1.30
				£2.30

£1.90    £1.80    £2.60    90p