

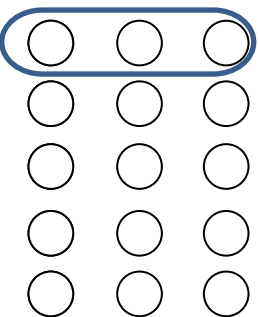


UNDERSTANDING MULTIPLICATION USING ARRAYS 2

Look at the **rows** of these arrays and change them into multiplications.

Please note: for these exercises, we are using 3×5 as 3 'lots of' 5 which is $5+5+5$.

1.  $5 + 5 + 5 + 5 = \underline{\quad}$
 OR
 $4 \times 5 = \underline{\quad}$

2.  $3 + 3 + 3 + 3 + 3 = \underline{\quad}$
 OR
 $5 \times 3 = \underline{\quad}$

3. Draw three rows of seven circles. $7 + 7 + 7 = \underline{\quad}$
 OR
 $3 \times 7 = \underline{\quad}$


Name


Date



UNDERSTANDING MULTIPLICATION USING ARRAYS 2

ANSWERS

1.  $5 + 5 + 5 + 5 = \underline{20}$
OR
 $4 \times 5 = \underline{20}$

2.  $3 + 3 + 3 + 3 + 3 = \underline{15}$
OR
 $5 \times 3 = \underline{15}$

3. Draw three rows of seven circles. $7 + 7 + 7 = \underline{21}$
OR
 $3 \times 7 = \underline{21}$

