


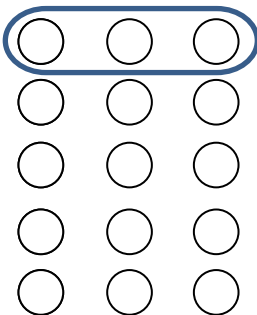


UNDERSTANDING MULTIPLICATION USING ARRAYS 2A

Look at the **rows** of these arrays and change them into multiplications.

Please note: for these exercises, we are using 3×5 as 3 **multiplied by** 5 which is $3+3+3+3+3$.

1.  $5 + 5 + 5 + 5 = \underline{\quad}$
 OR
 $5 \times 4 = \underline{\quad}$


2.  $3 + 3 + 3 + 3 + 3 = \underline{\quad}$
 OR
 $3 \times 5 = \underline{\quad}$


3. Draw three rows of seven circles. $7 + 7 + 7 = \underline{\quad}$
 OR
 $7 \times 3 = \underline{\quad}$



UNDERSTANDING MULTIPLICATION USING ARRAYS 2A

ANSWERS

1.  $5 + 5 + 5 + 5 = \underline{20}$
 OR
 $5 \times 4 = \underline{20}$

2.  $3 + 3 + 3 + 3 + 3 = \underline{15}$
 OR
 $3 \times 5 = \underline{15}$

3. Draw three rows of seven circles. $7 + 7 + 7 = \underline{21}$
 OR
 $7 \times 3 = \underline{21}$

