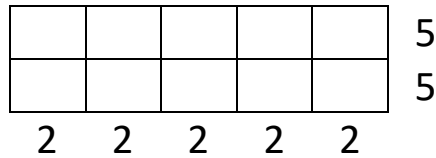




# UNDERSTANDING MULTIPLICATION USING ARRAYS 4

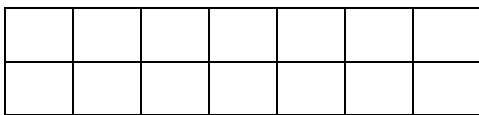
Look at these arrays and change them into multiplications.

Example



|                   |
|-------------------|
| $2 \times 5 = 10$ |
| $5 \times 2 = 10$ |

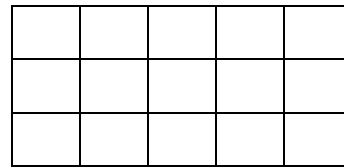
1)



\_\_\_ x \_\_\_ = \_\_\_

\_\_\_ x \_\_\_ = \_\_\_

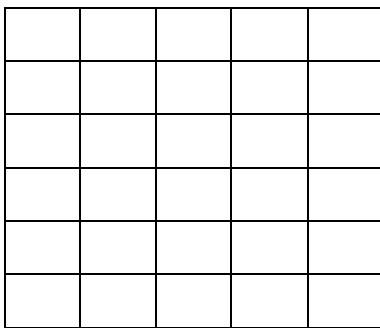
2)



\_\_\_ x \_\_\_ = \_\_\_

\_\_\_ x \_\_\_ = \_\_\_

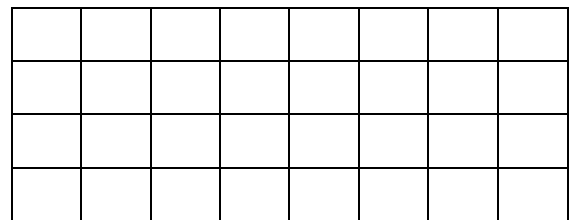
3)



\_\_\_ x \_\_\_ = \_\_\_

\_\_\_ x \_\_\_ = \_\_\_


4)



\_\_\_ x \_\_\_ = \_\_\_

\_\_\_ x \_\_\_ = \_\_\_

5)



\_\_\_ x \_\_\_ = \_\_\_

\_\_\_ x \_\_\_ = \_\_\_



Name

Date



# UNDERSTANDING MULTIPLICATION USING ARRAYS 4

## ANSWERS

1)

|  |  |  |  |  |  |  |  |
|--|--|--|--|--|--|--|--|
|  |  |  |  |  |  |  |  |
|  |  |  |  |  |  |  |  |

$$\underline{2} \times \underline{7} = \underline{14}$$

$$\underline{7} \times \underline{2} = \underline{14}$$

2)

|  |  |  |  |  |
|--|--|--|--|--|
|  |  |  |  |  |
|  |  |  |  |  |
|  |  |  |  |  |

$$\underline{3} \times \underline{5} = \underline{15}$$

$$\underline{5} \times \underline{3} = \underline{15}$$

3)

|  |  |  |  |  |
|--|--|--|--|--|
|  |  |  |  |  |
|  |  |  |  |  |
|  |  |  |  |  |
|  |  |  |  |  |
|  |  |  |  |  |
|  |  |  |  |  |

$$\underline{6} \times \underline{5} = \underline{30}$$

$$\underline{5} \times \underline{6} = \underline{30}$$

4)

|  |  |  |  |  |  |  |  |
|--|--|--|--|--|--|--|--|
|  |  |  |  |  |  |  |  |
|  |  |  |  |  |  |  |  |
|  |  |  |  |  |  |  |  |
|  |  |  |  |  |  |  |  |

$$\underline{4} \times \underline{8} = \underline{32}$$

$$\underline{8} \times \underline{4} = \underline{32}$$

5)

|  |  |  |  |  |  |  |  |  |  |
|--|--|--|--|--|--|--|--|--|--|
|  |  |  |  |  |  |  |  |  |  |
|  |  |  |  |  |  |  |  |  |  |

$$\underline{2} \times \underline{10} = \underline{20}$$

$$\underline{10} \times \underline{2} = \underline{20}$$