

Name _____


Date _____



UNDERSTANDING MULTIPLICATION USING ARRAYS 5A

Look at these arrays and change them into multiplications.


Example



$$6 \times 2 = 12$$
$$2 \times 6 = 12$$



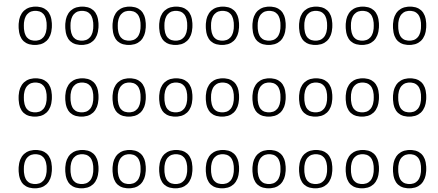
1)



$$\underline{\quad} \times \underline{\quad} = \underline{\quad}$$

$$\underline{\quad} \times \underline{\quad} = \underline{\quad}$$

2)



$$\underline{\quad} \times \underline{\quad} = \underline{\quad}$$

$$\underline{\quad} \times \underline{\quad} = \underline{\quad}$$


3)



$$\underline{\quad} \times \underline{\quad} = \underline{\quad}$$

$$\underline{\quad} \times \underline{\quad} = \underline{\quad}$$

4)



$$\underline{\quad} \times \underline{\quad} = \underline{\quad}$$

$$\underline{\quad} \times \underline{\quad} = \underline{\quad}$$

Name

Date



UNDERSTANDING MULTIPLICATION USING ARRAYS 5A

ANSWERS

1) O O O O
 O O O O
 O O O O

$$\underline{4} \times \underline{3} = \underline{12}$$

$$\underline{3} \times \underline{4} = \underline{12}$$

2) O O O O O O O O O O
 O O O O O O O O O O
 O O O O O O O O O O

$$\underline{9} \times \underline{3} = \underline{27}$$

$$\underline{3} \times \underline{9} = \underline{27}$$

3) O O O O O O O O
 O O O O O O O O
 O O O O O O O O
 O O O O O O O O

$$\underline{7} \times \underline{4} = \underline{28}$$

$$\underline{4} \times \underline{7} = \underline{28}$$

4) O O O O O
 O O O O O
 O O O O O
 O O O O O
 O O O O O
 O O O O O
 O O O O O

$$\underline{5} \times \underline{6} = \underline{30}$$

$$\underline{6} \times \underline{5} = \underline{30}$$