

Name

Date

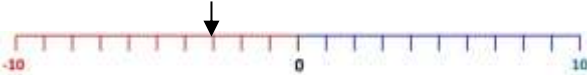
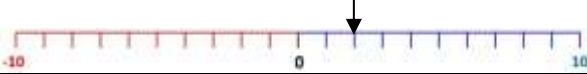
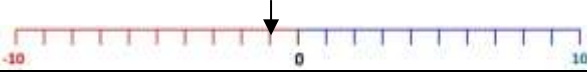
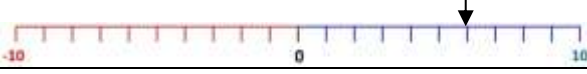
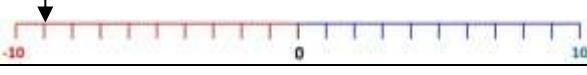



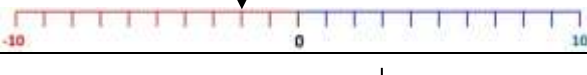
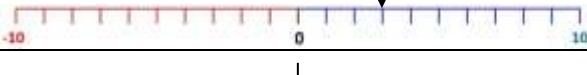







ABSOLUTE VALUE AND OPPOSITES 1

The opposite value is the number on the opposite side of the number line. The opposite of 7 is -7.

The absolute value is how far the number is from 0. It is always positive.

Complete the actual values and absolute values in the table. The first one is done for you.

		ACTUAL VALUE	OPPOSITE VALUE	ABSOLUTE VALUE (How far from 0)
1)		-3	3	3
2)				
3)				
4)				
5)				
6)				
7)				
8)				
9)				
10)				
11)				
12)				
13)				
14)				
15)				

Name

Date



ABSOLUTE VALUE AND OPPOSITES 1 ANSWERS

Complete the actual values and absolute values in the table. The first one is done for you.

		ACTUAL VALUE	OPPOSITE VALUE	ABSOLUTE VALUE (How far from 0)
1)		-3	3	3
2)		<u>2</u>	<u>-2</u>	<u>2</u>
3)		<u>-1</u>	<u>1</u>	<u>1</u>
4)		<u>6</u>	<u>-6</u>	<u>6</u>
5)		<u>-9</u>	<u>9</u>	<u>9</u>
6)		<u>5</u>	<u>-5</u>	<u>5</u>
7)		<u>-5</u>	<u>5</u>	<u>5</u>
8)		<u>8</u>	<u>-8</u>	<u>8</u>
9)		<u>-2</u>	<u>2</u>	<u>2</u>
10)		<u>3</u>	<u>-3</u>	<u>3</u>
11)		<u>0</u>	<u>0</u>	<u>0</u>
12)		<u>-8</u>	<u>8</u>	<u>8</u>
13)		<u>4</u>	<u>-4</u>	<u>4</u>
14)		<u>-6</u>	<u>6</u>	<u>6</u>
15)		<u>9</u>	<u>-9</u>	<u>9</u>