



## FACTORS AND MULTIPLES SHEET 4:2

1) Circle the numbers below which are multiples of 20:

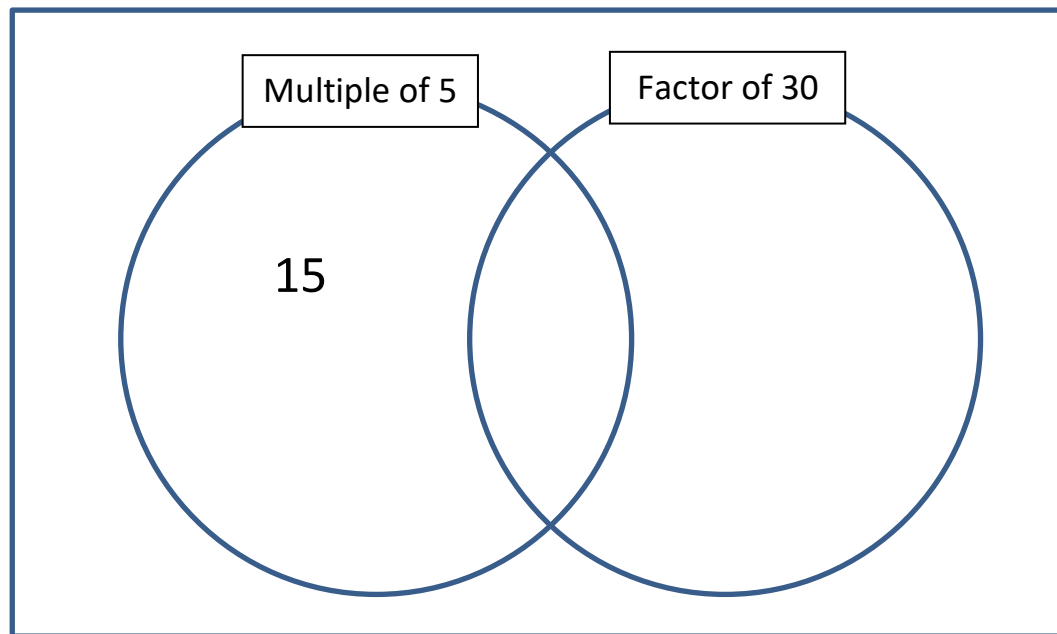
5    100    20    140    150    10

2) Circle the numbers below which are factors of 32:

1    12    8    2    96    16    64

3) Put the numbers in the correct place in the Venn diagram below.

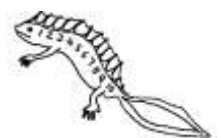
1	10	35	12	2	<del>15</del>	3	60	5
---	----	----	----	---	---------------	---	----	---



3) Write another number in the venn diagram which is both a multiple of 5 and a factor of 30.

4) Which of the numbers below are prime numbers?

24    13    21    28    3    11





## FACTORS AND MULTIPLES SHEET 4:2 ANSWERS

1) Circle the numbers below which are multiples of 20:

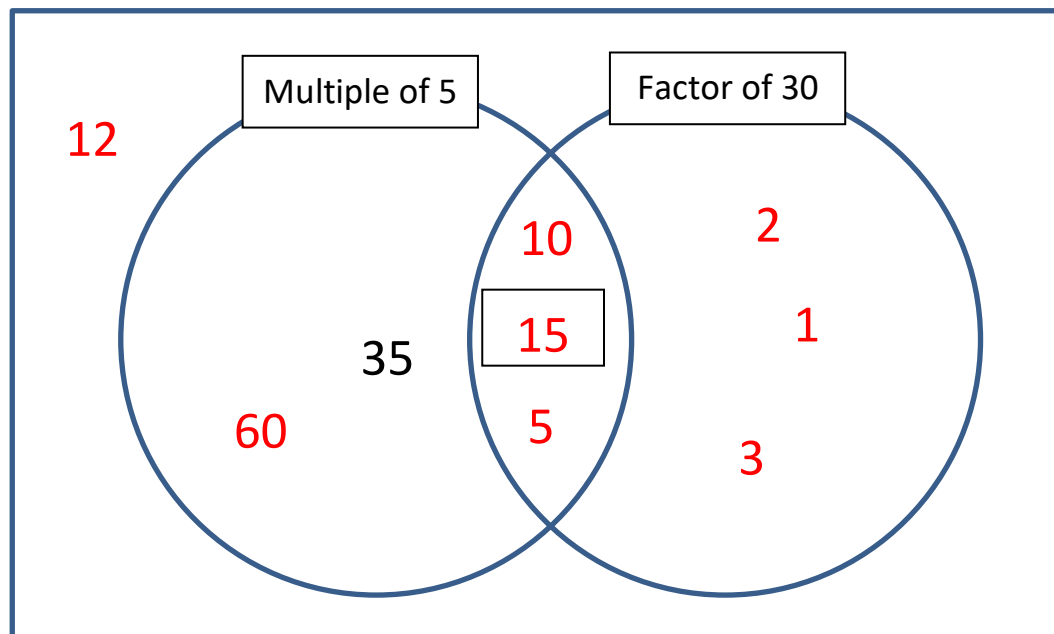
5   **100**   20   **140**   150   10

2) Circle the numbers below which are factors of 32:

**1**   12   **8**   **2**   96   **16**   64

3) Put the numbers in the correct place in the Venn diagram below.

1	10	<del>35</del>	12	2	3	60	5
---	----	---------------	----	---	---	----	---



3) Write another number in the venn diagram which is both a multiple of 5 and a factor of 30.

4) Which of the numbers below are prime numbers?

24   **13**   21   28   **3**   **11**

